


Today's Number




1. Simply Simplifying

----- ÷ ----- = -----

2. Geometry Today

Draw a rectangle with a perimeter of 17.




3. Factors

4. Prime or Composite
because _____

5. On Today's Number Line:

Label 1 and 2. Place 1.7



6. What's My Order?

Fill in with a decimal to make this number sentence true.

17 > _____ > 1.7

7. Convert It

17 yds = ___ ft

8. Daily Product or Quotient

Find the quotient of 1717 and 17

9. Daily Sum or Difference

Find the difference of 17.17 and 171

10. EOG Practice

If Lisa bakes a cake with $\frac{3}{4}$ cup of flour, how much flour will it take to bake 3 cakes?

11. Find the Mistake

$2 \frac{1}{2} T = 4,500 \text{ lb}$

What should the answer be?