


Today's Number




1. Simply Simplifying

$$\text{-----} \div \text{-----} = \text{-----}$$

2. Geometry Today


Draw two similar pentagons



3. Factors

4. Prime or Composite because _____

5. On Today's Number Line:
Label 1 and 2. Place 1.100



6. What's My Order?

Fill in with a decimal to make this number sentence true.

$$100 = \underline{\hspace{2cm}}$$

7. Convert It

Simplify $100/25$

8. Daily Product or Quotient

Find the quotient of 100 and 10

9. Daily Sum or Difference

Find the sum of 100.0 and 100.0

10. EOG Practice

Mrs. LaBounty has 100 popsicles to share equally with her class of 24 students. How many popsicles will be left over?

11. Find the Mistake

$$100 - 79.5 = 21.5$$

What should the answer be?