


Today's Number




**1. Simply Simplifying**

----- ÷ ----- = -----

**2. Geometry Today**

**Draw a pair of intersecting lines**




**3. Factors**

**4. Prime or Composite**  
because \_\_\_\_\_

\_\_\_\_\_  
\_\_\_\_\_  
\_\_\_\_\_

**5. On Today's Number Line:**  
**Label 1 and 2. Place 16/10**



**6. What's My Order?**

**Fill in with a decimal to make this number sentence true.**

$0.6 > \underline{\quad} > 0.06$

**7. Convert It**

**Simplify  $18/24$**

**8. Daily Product or Quotient**

**Find the product of 34.9 and 2.6**

**9. Daily Sum or Difference**

**Find the sum of  $34 \frac{1}{2}$  and  $8 \frac{3}{4}$**

**10. EOG Practice**

**There are 994 people attending a luncheon. If a table can hold 22 people, how many tables do they need?**

**11. Find the Mistake**

$14 - 3.85 = 11.85$

**What should the answer be?**