


Today's Number




1. Simply Simplifying

$$\text{-----} \div \text{-----} = \text{-----}$$

2. Geometry Today

Draw a pair of parallel line segments




3. Factors

4. Prime or Composite because \_\_\_\_\_

\_\_\_\_\_  
\_\_\_\_\_  
\_\_\_\_\_

5. On Today's Number Line:  
Label 1 and 2. Place 14/8



6. What's My Order?

Fill in with a decimal to make this number sentence true.

$$1.25 > \text{---} > 1$$

7. Convert It

Simplify 30/39

8. Daily Product or Quotient

Find the quotient of 82.1 and 25

9. Daily Sum or Difference

Find the difference of 23 and  $3 \frac{2}{5}$

10. EOG Practice

A container can hold 15 orange slices. If a company had 848 slices to put into containers, how many slices would they need to fill up the last container?

11. Find the Mistake

$$12/16 = 6/9$$

What should the answer be?