


Today's Number




1. Simply Simplifying

$$\text{-----} \div \text{-----} = \text{-----}$$

2. Geometry Today

Draw a line




3. Factors

4. Prime or Composite
because _____

5. On Today's Number Line:

Label 1 and 2. Place 4/2



6. What's My Order?

Fill in with a decimal to make this number sentence true.

$$2.6 > \text{___} > 2.59$$

7. Convert It

Simplify 18/22

8. Daily Product or Quotient

Find the quotient of 34.6 and 17

9. Daily Sum or Difference

Find the difference of 320.9 and 99

10. EOG Practice

Mrs. Spivey wants to divide 2 candy bars by 5 students. What fraction of the candy bars will each student receive?

11. Find the Mistake

$$1/3 \text{ divided by } 4 = 12$$

What should the answer be?