


1. Simply Simplifying

----- ÷ ----- = -----

2. Geometry Today

**Draw a square with an area of 6.25
Label each side...**




3. Factors

**4. Prime or Composite
because _____**

5. On Today's Number Line:

Label 1 and 2. Place one and three ninths



6. What's My Order?

**Fill in with a decimal to make this number
sentence true.**

$3\frac{3}{4} > \underline{\hspace{1cm}} > 3\frac{1}{2}$

7. Convert It

Change to a mixed number $\frac{25}{8}$

8. Daily Product or Quotient


Find the quotient of 4390 and 25

9. Daily Sum or Difference

Find the sum of $13\frac{1}{4}$ and $11\frac{5}{8}$

10. EOG Practice

Find the volume



11. Find the Mistake

$(10 - 4) + 16 \div 4 = 5.5$

What should the answer be?