


Today's Number




1. Simply Simplifying

----- ÷ ----- = -----

2. Geometry Today

**Draw a square with a perimeter of 16
Label each side**




3. Factors

**4. Prime or Composite
because _____**

5. On Today's Number Line:

Label 1 and 2. Place one and four sixths



6. What's My Order?

**Fill in with a decimal to make this number
sentence true.**

10.9 > ____ > 10.85

7. Convert It

Change to a mixed number 16/5

8. Daily Product or Quotient


Find the product of 4390 and 25

9. Daily Sum or Difference

Find the difference of 13 ¼ and 11 ¾

10. EOG Practice

Find the volume



11. Find the Mistake

David used a ¼ bottle of almond extract to make 4 pies.
What part of the bottle did David use for each pie? 16

What should the answer be?