


**1. Simply Simplifying**

----- ÷ ----- = -----

**2. Geometry Today**

**Draw a rectangle with an area of 20 square cm.**



**3. Factors**


**4. Prime or Composite because \_\_\_\_\_**

\_\_\_\_\_

\_\_\_\_\_

\_\_\_\_\_

**5. On Today's Number Line: Label 2 and 3. Place 2 1/5 on the line.**



**6. What's My Order?**

**Fill in with a decimal to make this number sentence true.**

$2.5 > \underline{\hspace{1cm}} > 2.4$

**7. Convert It**

$60 \text{ in} = \underline{\hspace{1cm}} \text{ ft}$

**8. Daily Product or Quotient**

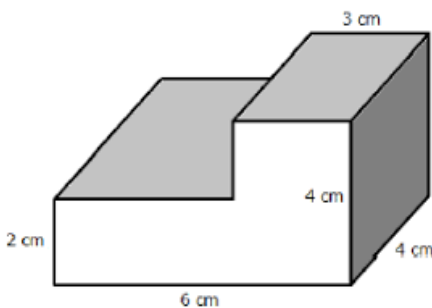
**Find the product of 36.9 and 4.5**

**9. Daily Sum or Difference**

**Find the difference of 36.9, 12 and 1.4**

**10. EOG Practice**

**Find the volume**



**11. Find the Mistake**

$\frac{1}{4} \div 8 = \frac{1}{24}$

**What should the answer be?**