


1. Simply Simplifying

----- ÷ ----- = -----

2. Geometry Today


Draw a rectangle with an perimeter of 46 cm.



3. Factors

4. Prime or Composite because _____

**5. On Today's Number Line:
 Label 2 and 3. Place $2\frac{3}{16}$ on the line.**



6. What's My Order?

Fill in with a decimal to make this number sentence true.

$2.08 > \underline{\hspace{1cm}} > 2$

7. Convert It

$2 \text{ mi} = \underline{\hspace{1cm}} \text{ ft}$

8. Daily Product or Quotient

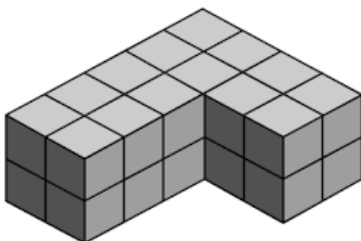
Find the quotient of 3829 and 12

9. Daily Sum or Difference

Find the sum of 3.5 and $2\frac{1}{4}$

10. EOG Practice

Find the volume



11. Find the Mistake

$8 \div \frac{1}{3} = \frac{1}{24}$

What should the answer be?