


Today's Number




1. Simply Simplifying

$$\text{-----} \div \text{-----} = \text{-----}$$

2. Geometry Today

Draw a rectangle with a perimeter of 26 inches. Label each side




3. Factors

4. Prime or Composite because _____

5. On Today's Number Line:

Label 2 and 3. Place 2.45 on the line.



6. What's My Order?

Fill in with a decimal to make this number sentence true.

$$\frac{1}{2} > \text{_____} > \frac{1}{4}$$

7. Convert It

$$3 \text{ miles} = \text{_____} \text{ yards}$$

8. Daily Product or Quotient

Find the quotient of 3928 and 16

9. Daily Sum or Difference

Find the sum of $2 \frac{1}{8}$ and $4 \frac{3}{4}$

10. EOG Practice

Find the width of a rectangular prism that has a volume of 288 in, a length of 6 in and a height of 12 in.

11. Find the Mistake

$$2 \text{ gal} = 4 \text{ qts}$$

What should the answer be?