


Today's Number




1. Simply Simplifying

$$\text{-----} \div \text{-----} = \text{-----}$$

2. Geometry Today

Draw a rectangle with a perimeter of 38 inches. Label each side




3. Factors

4. Prime or Composite because _____

5. On Today's Number Line:

Label 2 and 3. Place 2.08 on the line.



6. What's My Order?

Fill in with a decimal to make this number sentence true.

$$0.28 > \text{-----} > \frac{1}{4}$$

7. Convert It

$$3 \text{ quarts} = \text{-----} \text{ cups}$$

8. Daily Product or Quotient

Find the product of 392 and 22

9. Daily Sum or Difference

Find the difference of 9 and $4 \frac{3}{4}$

10. EOG Practice

Put the following units in order from smallest to largest.

3 m, 200 mm, 1.5 km, 15 cm

11. Find the Mistake

$$200 \text{ mm} = 2 \text{ cm}$$

What should the answer be?