


Today's Number




1. Simply Simplifying

----- ÷ ----- = -----

2. Geometry Today

Draw a rectangle with an area of 18 square inches. Label each side




3. Factors

4. Prime or Composite because _____

5. On Today's Number Line:

Place 1.8 – You label your endpoints



6. What's My Order?

Fill in with a decimal to make this number sentence true.

$2 > \underline{\hspace{1cm}} > 1.9$

7. Convert It

$3 \text{ gal} = \underline{\hspace{1cm}} \text{ pts}$

8. Daily Product or Quotient

Find the quotient of 49.2 and 25

9. Daily Sum or Difference

Find the sum of $9 \frac{3}{4}$ and $4 \frac{1}{2}$

10. EOG Practice

It takes Amy 35 minutes to drive to work and 35 minutes to drive home. If she works 4 days a week. How many minutes does she spend driving altogether?

11. Find the Mistake

$4.5 \text{ L} = 450 \text{ mL}$

What should the answer be?