


Today's Number




1. Simply Simplifying

$$\text{-----} \div \text{-----} = \text{-----}$$

2. Geometry Today

Draw a rectangle with an area of 44 square inches. Label each side




3. Factors

4. Prime or Composite because _____

5. On Today's Number Line:

Place 3.88 – You label your endpoints



6. What's My Order?

Fill in with a decimal to make this number sentence true.

$$2.05 > \text{_____} > 2$$

7. Convert It

$$3.52 \text{ km} = \text{_____ m}$$

8. Daily Product or Quotient

Find the product of 17.9 and 2.8

9. Daily Sum or Difference

Find the difference of 149 and 32.08

10. EOG Practice

It takes Amy 45 minutes to drive to work and 45 minutes to drive home. If she works 5 days a week. How many hours does she spend driving altogether?

11. Find the Mistake

$$650 \text{ mL} = 6.5 \text{ L}$$

What should the answer be?