


Today's Number




**1. Simply Simplifying**

----- ÷ ----- = -----

**2. Geometry Today**

**Draw a rectangle with an area of 16 square inches and a perimeter of 20 inches.**




**3. Factors**

**4. Prime or Composite because \_\_\_\_\_**

\_\_\_\_\_  
\_\_\_\_\_  
\_\_\_\_\_

**5. On Today's Number Line:**

**Label 0 and 1. Place 2/3 and 5/6**



**6. What's My Order?**

**Fill in with a decimal to make this number sentence true.**

**4.6 > \_\_\_\_\_ > 4.06**

**7. Convert It**

**21.8 km = \_\_\_\_\_ mm**

**8. Daily Product or Quotient**

**Find the product of  $8\frac{1}{2}$  and 4**

**9. Daily Sum or Difference**

**Find the difference of 26.1 and 0.88**

**10. EOG Practice**

Jane has 4 pounds of ice cream to sell. Two people each bought  $\frac{1}{2}$  a pound and one person bought  $\frac{1}{4}$  of a pound. How much ice cream does Jane have left to sell?

**11. Find the Mistake**

38 oz = 2.5 lbs

**What should the answer be?**