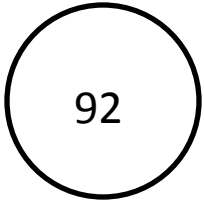


Today's Number




1. Simply Simplifying

----- ÷ ----- = -----

2. Geometry Today

Draw a straight angle




3. Factors

4. Prime or Composite
because _____

5. On Today's Number Line:

Label 0, 1. Place 0.035



6. What's My Order?

Fill in with a fraction to make this order greatest to least.

1.5, ____ 0.8

7. Convert It

Change 15/8 to a mixed number

8. Daily Product or Quotient

Find the product of 3,560 and 14

9. Daily Sum or Difference

Find the difference of 6 and 3/5

10. EOG Practice

Find the perimeter of a square with an area of 16 square units.

11. Find the Mistake

$10 - 2 \frac{1}{4} = 8 \frac{3}{4}$

What should the answer be?