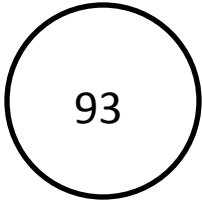


Today's Number




1. Simply Simplifying

----- ÷ ----- = -----

2. Geometry Today

Draw a 45 degree angle




3. Factors

4. Prime or Composite
because _____

5. On Today's Number Line:

Label 0, 1. Place 0.60



6. What's My Order?

Fill in with a fraction to make this order greatest to least.

0.9, ____ 0.8

7. Convert It

Change 23/9 to a mixed number

8. Daily Product or Quotient

Find the product of 2,984 and 23

9. Daily Sum or Difference

Find the difference of 6 and 4/7

10. EOG Practice

Find the perimeter of a square with an area of 64 square units.

11. Find the Mistake

$2 - 2 \frac{1}{4} = \frac{3}{4}$

What should the answer be?