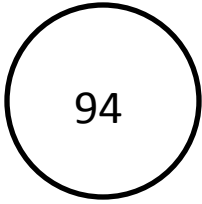


Today's Number




1. Simply Simplifying

----- ÷ ----- = -----

2. Geometry Today


Draw a right angle



3. Factors

4. Prime or Composite
because _____

5. On Today's Number Line:
Label 1 and 2. Place 1.235



6. What's My Order?

Fill in with a fraction to make this order
greatest to least.

1.65, _____ 1.6

7. Convert It

Make 4/7 a decimal

8. Daily Product or Quotient

Find the quotient of 8160 and 48

9. Daily Sum or Difference

Find the sum of 3.25 and 0.5

10. EOG Practice

A store has 234 bags of apples. There are 15 apples in each bag. How many apples does the store have altogether?

11. Find the Mistake

8 divided by 9 = 9/8

What should the answer be?