


Today's Number




1. Simply Simplifying

----- ÷ ----- = -----

2. Geometry Today

Draw an obtuse triangle




3. Factors

4. Prime or Composite
because _____

5. On Today's Number Line:

Label 1 and 2. Place $1\frac{3}{4}$



6. What's My Order?

Fill in with a decimal to make this order least to greatest.

0.05 _____ 0.5

7. Convert It

Simplify $\frac{22}{50}$

8. Daily Product or Quotient

Find the quotient of 2395 and 23

9. Daily Sum or Difference

Find the sum of $2\frac{1}{8}$ and $3\frac{2}{3}$

10. EOG Practice

What is the area of a rectangle with sides of $\frac{7}{8}$ and $\frac{5}{6}$?

11. Find the Mistake

$375 \times 2 = 740$

What should the answer be?